

Şekil Sayı Eşleştirme

×

= 7

⬠

= 1

◊

= 6

★

= 9

△

= 2

▽

= 0

○

= 8

□

= 4

+

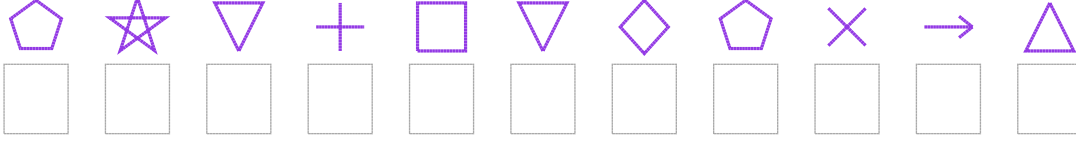
= 3

→

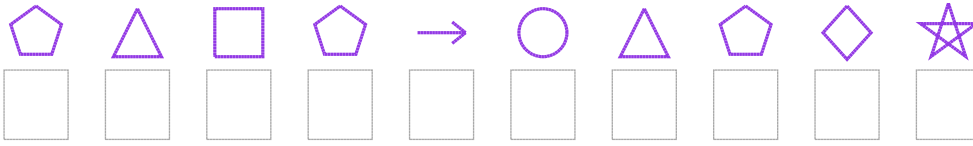
= 5

Aşağıdaki uzun şifreleri hatasız çözerek altlarına yazın:

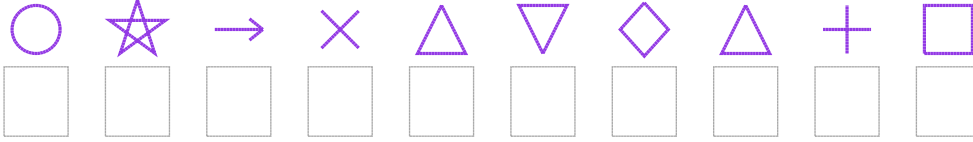
1. Şifre



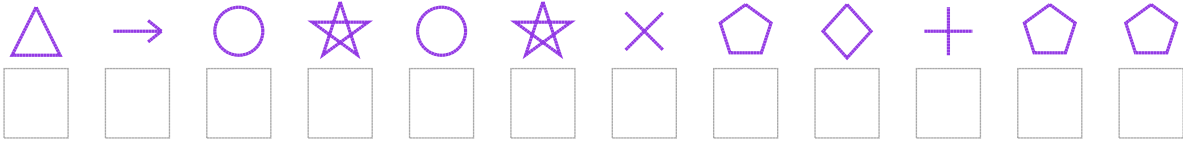
2. Şifre



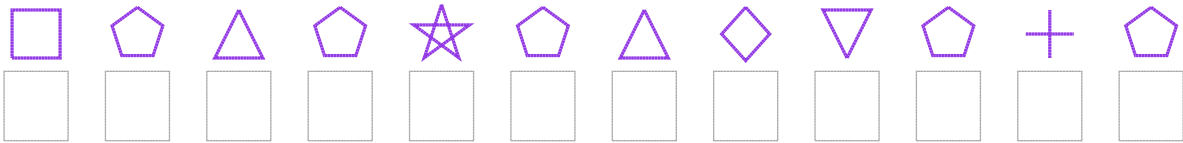
3. Şifre



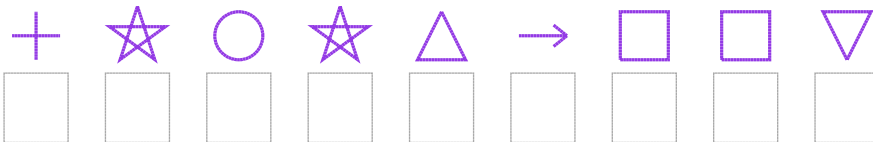
4. Şifre



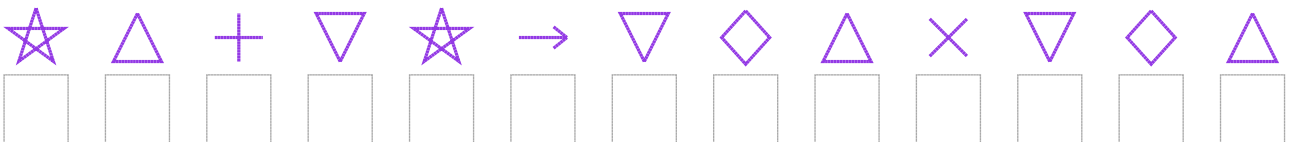
5. Şifre



6. Şifre



7. Şifre



□ BONUS: 6. ve 3. şifrenin ilk rakamının toplamı kaçtır?

Cevap Anahtarı

1. Şifre: 19034061752
2. Şifre: 1241582169
3. Şifre: 8957206234
4. Şifre: 258989716311
5. Şifre: 412191260131
6. Şifre: 398925440
7. Şifre: 9230950627062

□ Bonus Soru Cevabı: 11